

Name:


Score:

Class:


Date:

ROOMS IN A HOUSE


Look at the pictures and identify which part of the house they belong to. Tick the box of the correct answer.



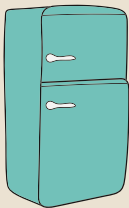
- kitchen
- garage
- living room



- laundry area
- living room
- dining room



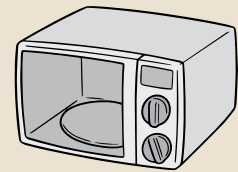
- garage
- bedroom
- attic



- kitchen
- garden
- bedroom



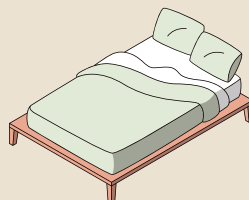
- dining room
- bathroom
- kitchen



- garage
- living room
- kitchen



- bedroom
- dining room
- bathroom



- garage
- living room
- bedroom



- garden
- attic
- kitchen